
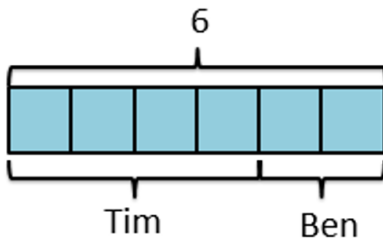
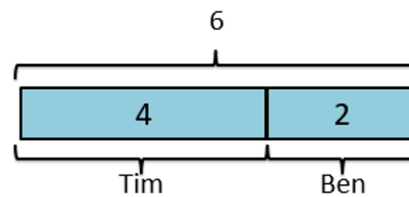
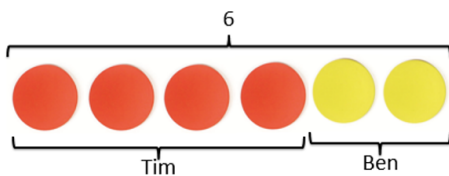
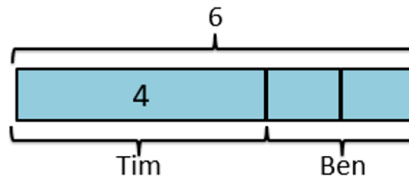
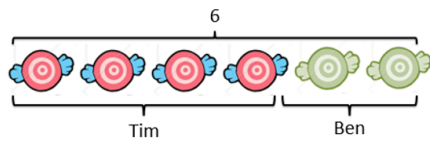


Bar modelling

KS1



Small steps



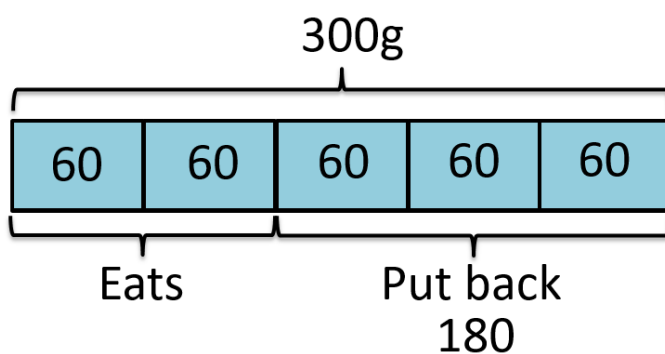
$$4 + 2 = 6$$

KS2

Solve... Matthew has a 300g block of cheese. He eats $\frac{2}{5}$ of the cheese and puts the rest back in the fridge.

How much cheese did Matthew put back in the fridge?

Model



Calculations

$$300 \div 5 = 60$$

$$3 \times 60 = 180$$